

ST. PETER'S INTER SCHOOL

Sanjua, Bakhrahat, South 24 Pgs.

Worksheet

Class - II Subject - Math

Date: 29. 2. 24

Name _____ Roll No. _____

1. Fill in the blanks with the correct units.

(a) My house is 8 _____ from my school. km/kg/mL

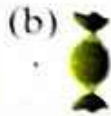
(b) The greengrocer sold 5 _____ of spinach today. km/L/kg

(c) Sudha drank 2 _____ of water today. m/kg/L

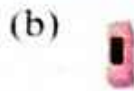

(d) A coconut tree is 2 _____ taller than the *tulsi* plant. L/kg/m

(e) Sarika's hair is 20 _____ long. kg/cm/mL

2. Tick (✓) the objects that are measured in kilograms.



3. Tick (✓) the objects that are measured in metres.



4. Tick (✓) the objects whose capacities are measured in litres.

