

ST. PETER'S INTER SCHOOL

Sanjua, Bakhrahat, South 24 pgs.
















Worksheet

Class - I Subject - Math

Date: 23.2.24



Name - _____ Roll - _____

D. Sahil has gone fishing with his father. He has caught many colourful fish.

	Fish									
Orange										
Red										
Green										
Purple										
Pink										
	1	2	3	4	5	6	7	8	9	10

- How many purple fish did he catch?
- How many pink fish did he catch?
- How many red fish did he catch?
- How many orange fish did he catch?
- How many green fish did he catch?

The following table shows the number and type of fruits he has distributed.

5							
4							
3							
2							
1							

Answer the following questions using the table above:

- How many apples has he distributed?
- How many pears has he distributed?
- How many oranges has he distributed?
- How many pineapples has he distributed?
- How many bunches of bananas has he distributed?
- How many mangoes has he distributed?
- How many strawberries has he distributed?
