

ST. PETER'S INTER SCHOOL

Sanjua, Bakhrahat, South 24 pgs.

Worksheet

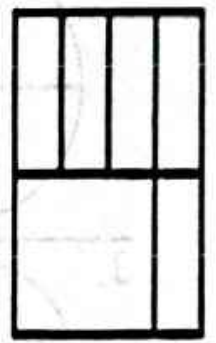
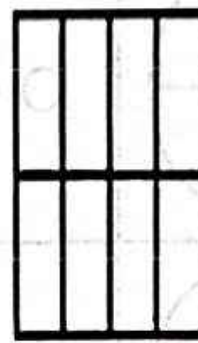
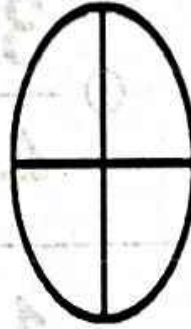
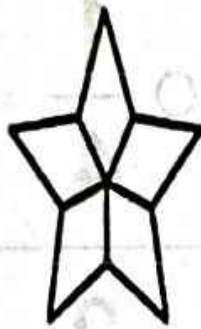

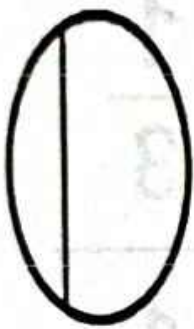
Class - III Subject - Math

Date : 24.01.24

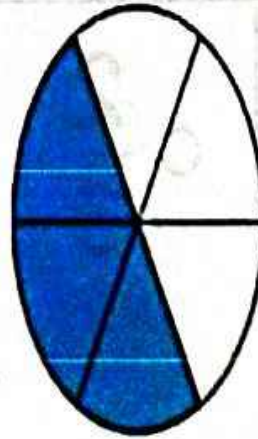
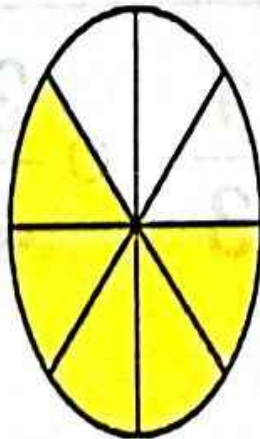
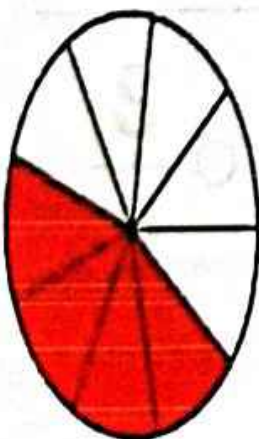
Name - _____

-Roll - _____

1. Put a tick (✓) in the box for the shape that is divided into equal parts.




2. Write the fraction below.



Fractions


Color in the correct answer for each fraction.

1.



- $\frac{2}{3}$ $\frac{2}{4}$ $\frac{1}{4}$ $\frac{1}{2}$

2.



- $\frac{1}{2}$ $\frac{3}{4}$ $\frac{1}{4}$ $\frac{1}{3}$

3.



- $\frac{3}{4}$ $\frac{1}{2}$ $\frac{2}{3}$ $\frac{1}{3}$

4.



- $\frac{2}{4}$ $\frac{3}{4}$ $\frac{1}{3}$ $\frac{1}{4}$

5.



- $\frac{2}{3}$ $\frac{1}{3}$ $\frac{2}{4}$ $\frac{3}{4}$