

ST. PETER'S INTER SCHOOL

Sanjua, Bakhrahat, South 24 Pgs.

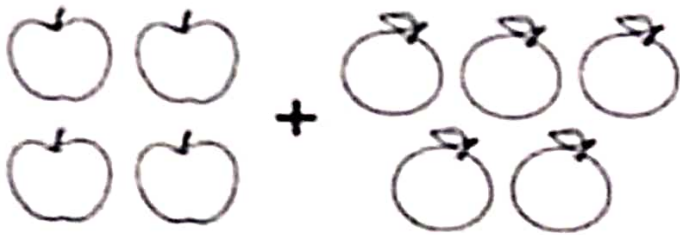
Worksheet

Class - Nursery Subject - Math

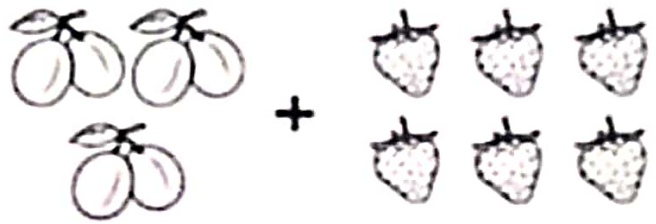
Date: 08.11.23

Name _____ Roll No. _____

Directions: Count the group and solve the addition problem.



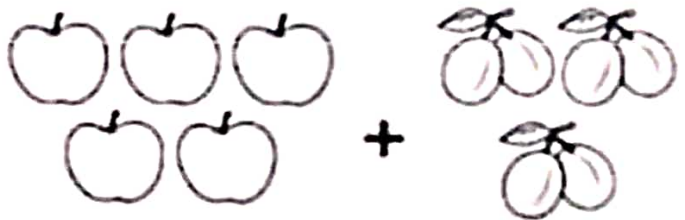
$$\square + \square = \underline{\quad}$$




$$\square + \square = \underline{\quad}$$



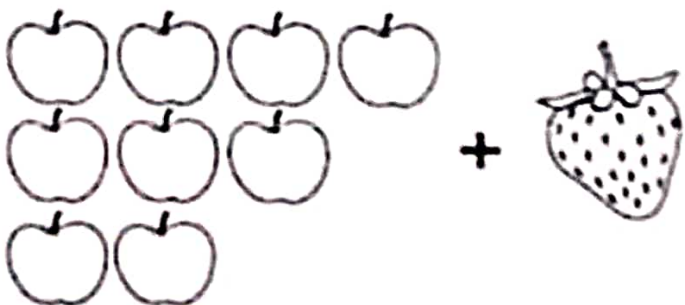
$$\square + \square = \underline{\quad}$$



$$\square + \square = \underline{\quad}$$



$$\square + \square = \underline{\quad}$$



$$\square + \square = \underline{\quad}$$