

ST. PETER'S INTER SCHOOL

Sanjua, Bakhrabat, South 24 pgs.

Worksheet

Class - Nursery Subject - Math

Date : 08.11.23

Name - _____ Roll - _____

Find the missing number

$18 \rightarrow \square \rightarrow 20 \rightarrow 21 \rightarrow \square$



$\square \rightarrow 26 \rightarrow 27 \rightarrow \square \rightarrow 29$

$29 \rightarrow \square \rightarrow 31 \rightarrow \square \rightarrow 33$

$28 \rightarrow 29 \rightarrow \square \rightarrow 31 \rightarrow \square$

$27 \rightarrow \square \rightarrow 29 \rightarrow 30 \rightarrow \square$



Write the missing Numbers



2

4

5



1

6

3