

ST. PETER'S INTER SCHOOL

Sanjua, Bakhrabat, South 24 Pgs.

Worksheet


Class - II Subject - Math

Name _____ Roll No. _____


Directions: Draw the Hour and the Minute hand on each clock to match the time given.



(1) 4 : 00




(2) 2 : 30




(3) 11 : 00




(4) 8 : 00




(5) 9 : 00




(6) 8 : 30




(7) 4 : 30



(8) 12 : 30



(9) 1 : 00



(10) 10 : 00