

ST. PETER'S INTER SCHOOL


Sanjua, Bakrahat, South 24 Pgs.


Worksheet


Class - II Subject - Math


Name _____ Roll No. _____

1. Write the length of each object.

(a)  _____ cm

(b)  _____ cm

(c)  _____ cm

(d)  _____ cm

2. What could be the length of the given objects? Colour the correct box.

(a)  about 7 cm about 7 m

(b)  about 15 cm about 15 m

(c)  about 2 cm about 2 m

(d)  about 2 cm about 2 m

3. Circle the objects that you will measure in metres.

