

ST. PETER'S INTER SCHOOL

Sanjua, Bakrahat, South 24 Pgs.

Worksheet

Class - II Subject - Bengali

Name _____ Roll No. _____

১। সঙ্গে দেওয়া দুটি উত্তরের মধ্যে যেটি ঠিক সেটি লেখো :

ক। নৌকা বেয়ে খড়ের আঁটি জ্বলবে - মদন / চাখির মেয়ে।

উঃ -

খ। বরের নাম - রহমানাথ / বৈদ্যনাথ।

উঃ -

গ। নিত্যশরণ গানের - ভক্তা / ক্যাপটেন।

উঃ -

ঘ। হাট বসেছে - রবিবার / শুক্রবার।

উঃ -

ঙ। কংস বধে - কৃষ্ণ / সং সাজতে হবে।

উঃ -

চ। সেখানে - রান - বধের / কংস - বধের অধিনায় হবে।

উঃ -

ছ। মেঘের রং ঘন - লাল / নীল।

উঃ -

জ। টং টং করে - দশটা / নটা বাজল।

উঃ -

২। শূন্যস্থান পূরণ করো :

ক। গাড়ি চালায় _____।

খ। শীতের _____ নরাকট।

৩। অর্থ লেখো :

ক) ব্যাবসা - _____

খ) ভূতা - _____

গ) বাসা - _____

৪। অনুস্বার (২) দিয়ে লেখা হয় এমন চারটি শব্দ লেখো :

ক) _____ খ) _____

গ) _____ ঘ) _____

৫। ঘ - ফলা (১) দিয়ে লেখা হয় এমন চারটি শব্দ লেখো :

ক) _____ খ) _____

গ) _____ ঘ) _____

৬। ছোটো ছোটো বাক্য লিখে উত্তর দাও :

ক) কালের বুড়িতে কি কি আছে ?

উঃ -

খ) কুমোরপাড়া থেকে গাড়ি নিয়ে কান্না এসেছে ?

উঃ -

গ) কংস বধ কাকে দেখানো হবে ? তার বাড়ি কোথায় ?

উঃ -

Worksheet - II

Class - II (Mathematics)

Name - _____

Roll No. - _____

A. Write down the numbers in the expanded form -

- | | | |
|----------------|---|--|
| 1. 193 = _____ | = | |
| 2. 107 = _____ | = | |
| 3. 154 = _____ | = | |

B. Fill in the blanks

1. 1 hundred + 4 tens + 8 ones = _____
2. 1 hundred + 2 tens + 7 ones = _____
3. 1 hundred + 5 tens + 6 ones = _____

C. Fill in the blanks

1. $100 + 30 + 4 =$ _____
2. $100 + 30 + 4 =$ _____
3. $100 + 00 + 7 =$ _____

D. Look at these groups of balls. Write them in order as instructed.

1. 141 46 134
167 183 = _____

Ascending order

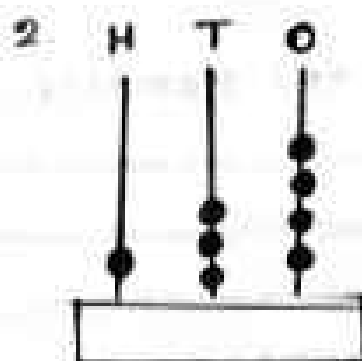
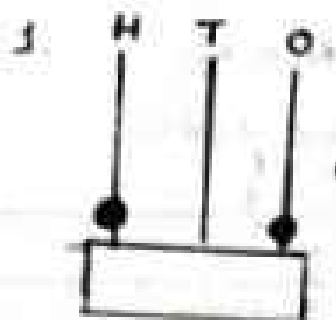
Descending order

2. 101 110 111
100 108 = _____

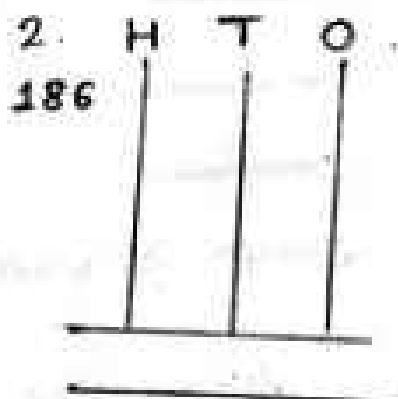
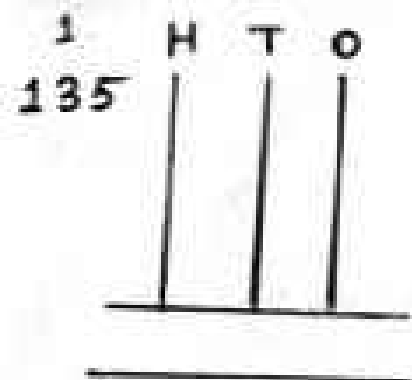
E. Write the place value of the circled digit

- | | |
|------------------|------------------|
| 1. 1(8)3 = _____ | 4. (3)56 = _____ |
| 2. 1(7)9 = _____ | 5. 13(5) = _____ |
| 3. 19(4) = _____ | |

F. Write the number shown on each abacus also. write their number names.



G. Draw the correct number of beads on each Abacus. Also write the expanded form -



ST. PETER'S INTER SCHOOL


Sanjua, Bakrahahat, South 24 Pgs.

Worksheet

Class - II Subject - English Grammar

Name - _____ Roll No. _____

A. Name the following.





B. Circle the proper nouns.

1. car, bicycle, Suzuki, scooter, bus, Hyundai
2. books, table, pencil, Reynolds, Parker, paper
3. computer, laptop, mobile, Samsung, Dell, mouse

C. Underline the common nouns in the given sentences.

1. I kept the book on the table.
2. There are many trees in my area.
3. We are passing through a road in the jungle.

D. Pick the odd man out from the given list of nouns.

1. car, Italy, room, mat _____
2. Paris, London, Spain, bicycle _____
3. animals, nature, insects, white elephant _____

E. What is it called?



Which vegetable is orange in colour and rhymes with parrot?

Ans. _____



Name this body organ that is found in a pair and help us to see.

Ans. _____

ST. PETER'S INTER SCHOOL

Sanjua, Bakhnahal, 24 PGS(S)

Worksheet

Class-II, Sub-English-Literature

Name- _____

Roll No. _____

A. Complete these sentences.

1. There are many pigeons in Eyad's _____
in the morning.
2. Some pigeons are white, like Dada's _____.
Some are grey, like Dadi's _____.
3. When Eyad hums, the pigeons _____.

B. Tick (✓) the correct answers.

1. Does Eyad think pigeons are ugly? yes/No.
2. Does Eyad feed the pigeons? yes/No.
3. Does Eyad want to play with the pigeons? yes/No.

C. Answer in one sentence.

1. Where does the poet's mother go to work?

Ans. _____

2. What did the children do when they could not find Lucky?

Ans. _____

St. Peter's Inter School

CLASS TEST

Sub - EVS

CLASS - II

Name -

A. Tick (✓) the correct answers.

1. Which one is the first meal of the day?

- a) Lunch b) Breakfast c) Dinner.

2. Fruits and vegetables are foods which are

- a) energy-giving b) protective c) body-building

3. Which one is a non-vegetarian food?

- a) Bread b) Fish c) Rice.

B) Complete the words.

1. Water helps in the digestion of f _ _ _ _ .

2. We should take a light d _ _ _ _ _ .

3. A balance diet keeps us h _ _ _ _ _ .

c) Answer these questions.

1. Name three foods that come from plants.

2. Why do we need food?

ST. PETER'S INTER SCHOOL

Class 2

Worksheet 2

EVS

Name _____

A. Tick the correct option:

1. People drink camel's milk in-

- a) Cities
- b) Villages
- c) Deserts

2. Vitamins are found in-

- a) Fruits
- b) Eggs
- c) Pulses

3. Which one is used as a sweetner and also as an antiseptic?

- a) Honey
- b) Sugar
- c) Milk

4. Dhokla is the popular dish of which state?

- a) Maharashtra
- b) South India
- c) Gujrat

5. Which nutrient protects our body from diseases?

- a) Proteins
- b) Carbohydrates
- c) Vitamins

B. Write down the name of the states where these dishes are famous -

1. Srikhand

2.Momos

3.Makki ki roti and Sarson ka saag

4.Pav - Bhaji

5.Dal Bati Choorma

C. Fill in the blanks:

1. _____ is a complete food.
2. Carbohydrates are essential for giving _____ to the body.
3. _____ are also known as go foods.
4. _____ and _____ are two important minerals for the body.
5. _____ are also known as grow foods.

D. Answer the following questions :

- 1.Which are the main nutrients in the food?
- 2.What is a balanced diet?
- 3.Why should we drink plenty of water everyday?

ST. PETER'S INTER SCHOOL
English Grammar
Worksheet

Name -

Roll.No. -

class - II

1. Put the following words in an alphabetical order.

a. boat can telephone sweets nose

Ans.

b. mouse cat dog giraffe panda

Ans.

c. Sage Spoon Six Seven Sweet

Ans.

d. pretty party pen pull pill

Ans.

e. sun orange apple tiger bat

Ans.